








# Snooker Pot Shots 2

*Answers*



**Snooker Balls have the following values**

Red	Yellow	Green	Brown	Blue	Pink	Black
						
1	2	3	4	5	6	7

But if you pot the White by accident 4 points go to your opponent

Find these scores so far

Bobby pots



Red

Blue

Red

$$1 + 5 + 1 = 7$$

Nina pots



Red

Pink

$$1 + 6 = 7$$

Bobby pots the White at the end of his next turn. Oops!



Bobby pots

Red

Green

Red

White (!)  $1 + 3 + 1 = 5$

Nina gets 4 Points



Nina pots

Red

Blue

Red

Green  $1 + 5 + 1 + 3 = 10$

What is Nina's score so far?  $7 + 4 + 10 = 21$

How many Red balls are left on the Table if they started with 15?

Together they have potted 7 Reds so  $15 - 7 = 8$

