





Sharing pizza 3

We can write a quarter

like this :

$$\frac{1}{4}$$

Can you write one quarter, two quarters, three quarters and four quarters in the boxes ?



Draw two quarters on the pizza together on one side. What is it equal to?



Can you do this sum?

$$\frac{1}{4} + \frac{1}{4} = \boxed{}$$

Try this:

$$\frac{1}{4} + \frac{1}{4} + \frac{1}{4} = \boxed{}$$